




First Grade Weekly Homework Choice Board

Student _____

Week: Mar 12-16, 2018

Check each item as your child finishes it. All students should read at least 20 minutes each night. Study your sight words.

Reading/Writing	Math/ELA/Phonics	
<p>MyOn.com username: student id# password: read read at least 2 books and take the quiz for the book.</p> <input data-bbox="441 802 483 873" type="checkbox"/>	<p>Complete the attached pages.</p> 	
<p>Tumblebooks.com Students can select books to read and take the quiz.</p> <p>username: libertyp Password: books</p> <input data-bbox="441 1066 483 1138" type="checkbox"/>	<p>www.tenmarks.com Complete the assignments given by your teacher. (some first grade classes do not have accounts.)</p> <input data-bbox="1013 1066 1055 1138" type="checkbox"/>	
 <input data-bbox="435 1507 477 1579" type="checkbox"/>	 <input data-bbox="1006 1507 1049 1579" type="checkbox"/>	

Parent Signature _____

Important Notes

- Please send a note for all transportation changes.
- Our lunch is very early; students may bring a snack each day.

All homework should be done in the homework journal provided. Please date the homework assignments to make it easy for grading. Only use one page daily, and if multiple assignments can fit on one page, please do so. Homework is due each Friday.

FLUENCY PASSAGE

Directions: Set a timer for one minute. Read the following passage aloud as quickly and as accurately as you can. Record how many words you read correctly at the bottom of this page. Repeat one more time. Do this Monday through Thursday. The purpose of this activity is to increase reading fluency.

Ross's Mess

Tess has a class.	4
“Do not make a mess, Ross.”	10
Ross cannot sit still.	14
Ross can toss a ball.	19
Ross spills a glass.	23
It makes a mess.	27
Ross runs in the grass.	32
Ross steps on Tess's dress.	37
Ross is stressed.	40
What a mess!	43
Will Tess be cross?	47
Tess is back.	50
She is not cross.	54
Tess missed Ross!	57

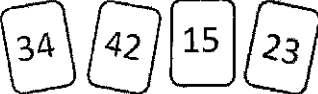

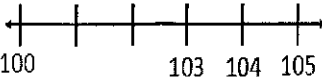

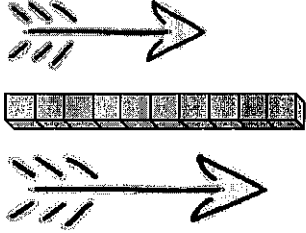



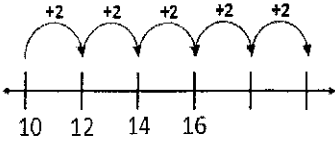
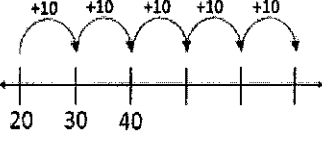
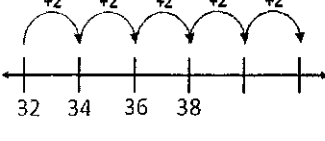
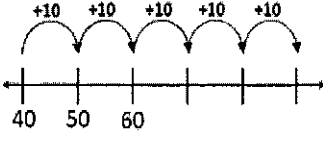
By signing below, I am acknowledging that my child has read the passage above aloud to me two times.

Monday		Tuesday		Wednesday		Thursday	
1 st Try	_____ Words	1 st Try	_____ Words	1 st Try	_____ Words	1 st Try	_____ Words
2 nd Try	_____ Words	2 nd Try	_____ Words	2 nd Try	_____ Words	2 nd Try	_____ Words
Parent/Guardian Signature: _____		Parent/Guardian Signature: _____		Parent/Guardian Signature: _____		Parent/Guardian Signature: _____	

Name:

Weekly Math Review - Q3:6


Date:

Monday	Tuesday	Wednesday	Thursday
Put the number cards in order from greatest to least.  _____ _____	Name the shape  _____ How many? Sides _____ Points _____	Fill in the missing numbers on the number line. 	What is the shaded piece called? 
Which arrow is 7 blocks long? 	What time is it?  :	Order the arrows from longest to shortest. 	Draw the hands on the clock to show 4:30. 
There is a jar of gumballs. Susie takes 5 gumballs out of the jar. There are 8 gumballs left. How many gumballs were in the jar before Susie took some?	Jessica went to the store and bought an apple for 2 dollars, a watermelon for 6 dollars, and a bag of potatoes for 8 dollars. How many dollars did Jessica spend?	Brandon plays soccer. During his first game he kicked the ball 8 times. During his second game he kicked the ball 10 times. How many times did Brandon kick the ball in both games?	Gavin reached his hand in a bag and pulled out 7 pennies, 3 dimes, and 4 quarters. How many coins does Gavin have?
Find the missing number. $14 - 3 = \underline{\quad}$ $3 + \underline{\quad} = 14$	Find the missing number. $12 - 9 = \underline{\quad}$ $9 + \underline{\quad} = 12$	Find the missing number. $15 - 8 = \underline{\quad}$ $8 + \underline{\quad} = 15$	Find the missing number. $11 - 5 = \underline{\quad}$ $5 + \underline{\quad} = 11$
Fill in the missing numbers. 	Fill in the missing numbers. 	Fill in the missing numbers. 	Fill in the missing numbers. 
Solve. $\begin{array}{r} 14 \\ + 3 \\ \hline \end{array}$ $\begin{array}{r} 17 \\ - 5 \\ \hline \end{array}$ $\begin{array}{r} 9 \\ + 7 \\ \hline \end{array}$ $8 + 6 = \underline{\quad}$ $14 - 8 = \underline{\quad}$	Solve. $\begin{array}{r} 10 \\ + 7 \\ \hline \end{array}$ $\begin{array}{r} 15 \\ - 6 \\ \hline \end{array}$ $\begin{array}{r} 6 \\ + 9 \\ \hline \end{array}$ $11 + 7 = \underline{\quad}$ $16 - 4 = \underline{\quad}$	Solve. $\begin{array}{r} 7 \\ + 2 \\ \hline \end{array}$ $\begin{array}{r} 13 \\ - 6 \\ \hline \end{array}$ $\begin{array}{r} 7 \\ + 5 \\ \hline \end{array}$ $6 + 8 = \underline{\quad}$ $9 - 7 = \underline{\quad}$	Solve. $\begin{array}{r} 12 \\ + 6 \\ \hline \end{array}$ $\begin{array}{r} 19 \\ - 7 \\ \hline \end{array}$ $\begin{array}{r} 10 \\ + 4 \\ \hline \end{array}$ $12 + 7 = \underline{\quad}$ $18 - 9 = \underline{\quad}$


Color the words that start with **sc**.



scale



snail



swing



scarf

Choose the **conjunction** to finish each sentence.

but

and

so

I tried _____ I didn't get the answer right.

We learned ballet _____ hip hop dancing.

I ate my dinner _____ I can have dessert.

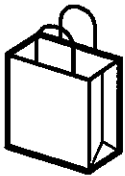
my doge chases his tail

correct capitals

correct punctuation

my best spelling

Word Family -ag



b _____

r _____



fl _____

t _____



Write the numbers that come before and after.

61, 62, __, 64, __

Write the number word.

64

Solve


$64 + 1 = \underline{\quad}$

$64 + 2 = \underline{\quad}$

$64 + 3 = \underline{\quad}$

$64 + 4 = \underline{\quad}$

Fill in the blanks.



How many candles are lit?

$13 - 5 = \underline{\quad}$

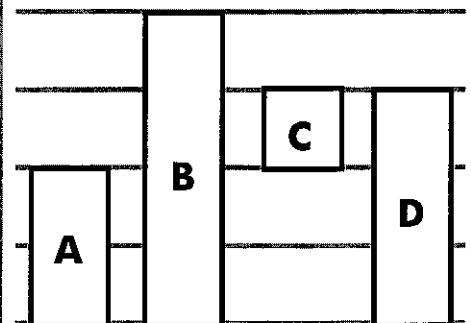
Write numbers to make each sentence true.

$>$
is greater than

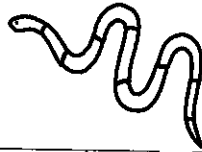

$<$
is less than

$=$
is equal to

Tape D is shorter than tape _____.



Write the beginning sound of each word.



ail

ake

ow

Each **syllable** in a word must have one vowel sound. Draw a line from each word to the number of syllables.

smelled

even

legs

1
2
3

insect

tail

dinosaur

will you sweep thee floor

correct capitals correct punctuation my best spelling

Word Family -ig


Circle the word that matches the picture.



big dig



fig jig



twig pig



zig wig

64 > ○

64 < ○

64 = ○

64 ≠ ○

Base Ten Blocks

□ = 10 ▢ = 1

64



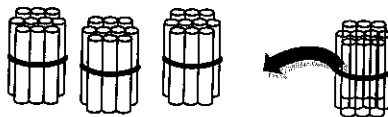
Color 13 squares green



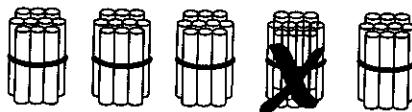
13 green + _____ white = 18

13 + □ = 18

□ + 13 = 18



30 + 10 = _____



50 - 10 = _____

Animals At the Zoo

Lions	
Bears	
Giraffes	

We counted the animals we saw at the zoo on our field trip.

_____ has the most votes.

_____ has the least votes.

Name _____

Day 8

Mental Math

1. $26 - 10 =$ _____
2. $71 - 10 =$ _____
3. $59 - 10 =$ _____
4. $83 - 10 =$ _____


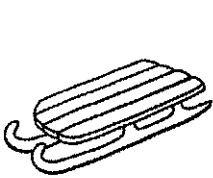
Verbs

Circle the verbs in each sentence.

1. My family baked and frosted cupcakes.
2. I made snowballs and threw them at my brother.


Vowel Sounds

Write the vowel sound for each picture.



Time

Write the time.



Sentence Writing

Fix the sentence. Rewrite it correctly on the lines.

she wuz happe to sea hur dog.

Name _____

Day 9

Addition

Find the sums.

8	6	7	8
3	6	6	2
+4	+4	+3	+3
_____	_____	_____	_____

Punctuation

Put the correct mark at the end of each sentence. (., !, ?)

1. May I have another cookie
2. Wow, that is great
3. Is this your pencil

Addition

Fill in the missing addend.

$$7 + \square = 16$$

$$\square + 5 = 14$$

$$9 + \square = 17$$

Noun/Verb Sort

Sort the words.

snow skip tree laughed
ran pencil jump book

Noun

Verb

Sentence Writing

Add detail to the sentence below and write it on the lines.

He smiled.
